

Dear Future First Grader,

Here we are at the end of another school year! Can you believe that kindergarten is over and summer is beginning? Now it's time to sit back, relax, and enjoy some summer reading.

Below are a few books I've chosen for our summer reading. I know you will enjoy both of the books. You will be expected to read one book and complete the book report (which can be found on page 2). Please be sure to bring the completed book report with you on the first day of school.

Enjoy your summer! Relax and have fun with your families. I look forward to seeing you at the end of August. It's sure to be a great year in first grade!

Sincerely,
Ms. Alexis Rankin

Book Choices:
Don't Throw it to Mo! by David Adler
Yard Sale by Eve Bunting

Name: _____

Date: _____

Book Report

Title: _____

Author: _____

Beginning

Middle

End

The story is about _____

I did or did not like the story because _____

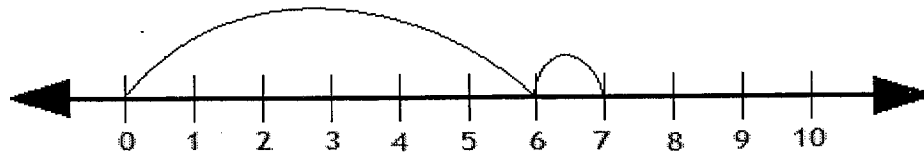
Rating:



I give this book _____ stars.

Solve the following by drawing hops on the number line.

Example:



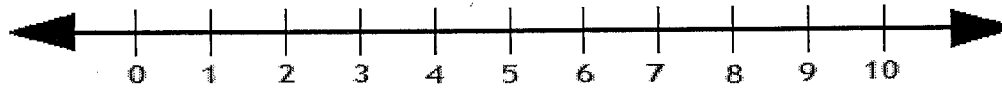
$$6 + 1 = \boxed{7}$$

1.



$$5 + 2 = \boxed{}$$

2.



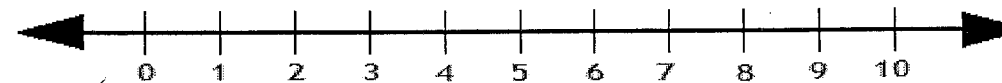
$$4 + 4 = \boxed{}$$

3.



$$3 + 1 = \boxed{}$$

4.



$$6 + 4 = \boxed{}$$

SHOVELIN' SUMS

Name: _____

Directions: Find the sum.



$5+5=$ _____




$8+0=$ _____



$2+7=$ _____



$6+1=$ _____



$7+3=$ _____



$4+2=$ _____



$0+9=$ _____



$5+3=$ _____



$3+3=$ _____



$1+8=$ _____



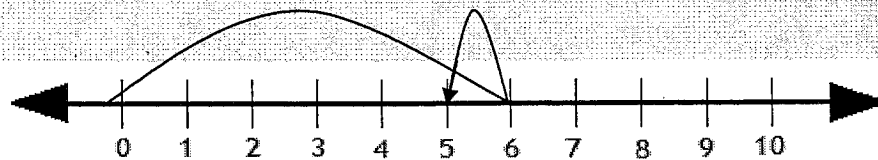
$9+1=$ _____



$2+4=$ _____

Subtract by drawing hops on the number line.

Example:



$$6 - 1 = \boxed{5}$$

1.



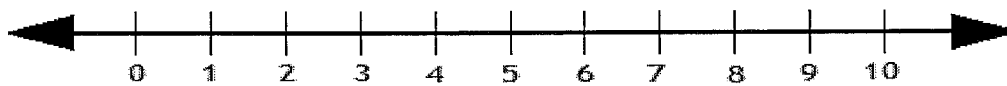
$$3 - 1 = \boxed{}$$

2.



$$9 - 5 = \boxed{}$$

3.



$$10 - 3 = \boxed{}$$

4.



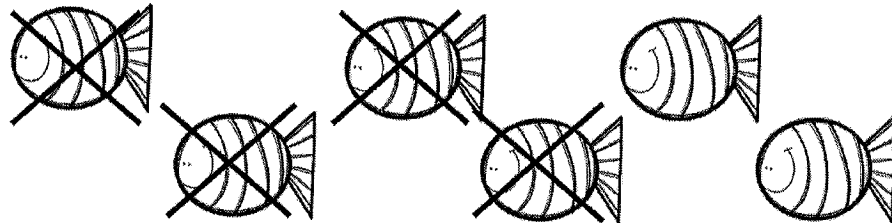
$$7 - 6 = \boxed{}$$

SWIMMIN' SUBTRACTION

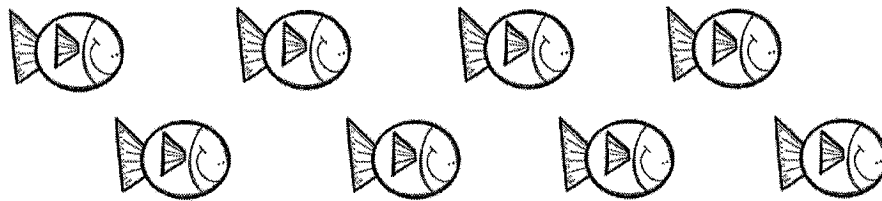
Name: _____

Directions: Use the pictures to help you solve the subtraction problem.

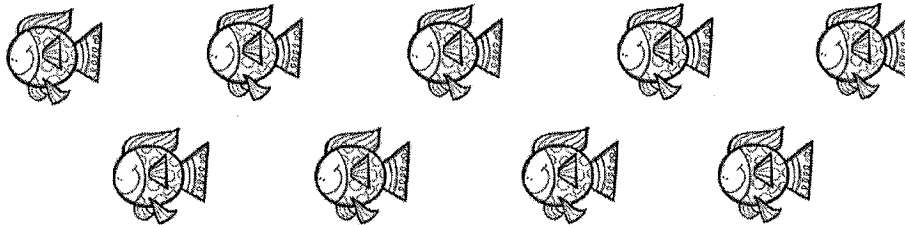
$6-4=$ _____



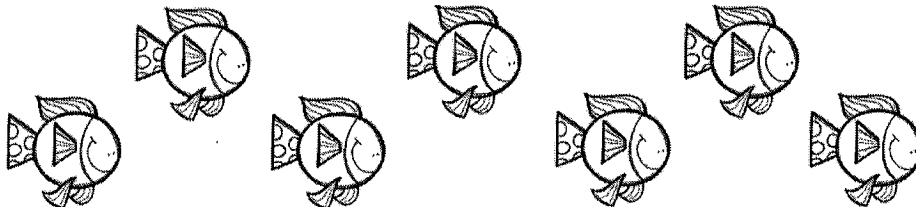
$8-2=$ _____



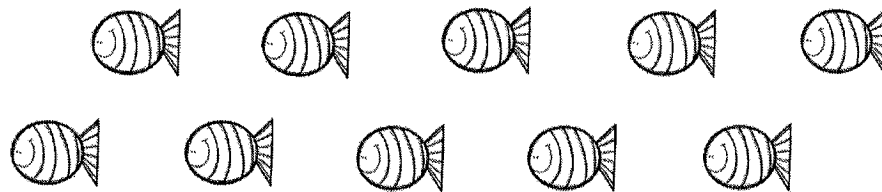
$9-5=$ _____



$7-1=$ _____



$10-3=$ _____



$4-0=$ _____

