

Name _____

Find the correct answer.

1. Add.

$$\begin{array}{r} 37 \\ + 30 \\ \hline \end{array}$$

- A. 13
B. 67
C. 76
D. 77

2. Which number is 10 more than 32?

- A. 22
B. 31
C. 42
D. 43

3. Add.

$$40 + 50 = ?$$

- A. 450
B. 405
C. 100
D. 90

4. Which TWO sets of numbers have a sum of 36?

- A. 23 and 13
B. 17 and 26
C. 16 and 20
D. 15 and 16

5. Fay finds 38 green leaves. She finds 16 red leaves. How many leaves does Fay find in all?

Fay finds _____ leaves.

6. Sam jumps rope 25 times. Paul jumps 15 more times than Sam. How many times does Paul jump?

Paul jumps _____ times.

Find the correct answer.

9.
$$\begin{array}{r} 26 \\ + 20 \\ \hline \end{array}$$

- A. 46
- B. 36
- C. 26

11. $26 + 2 = ?$

13. Drew has 18 blocks. Joey gives him 3 groups of ten blocks. How many blocks does Drew have in all?

Drew has _____ blocks in all.

15. $30 + 30 = ?$

17. $5 \text{ tens} + 4 \text{ tens} = ?$

- A. 7 tens
- B. 9 tens
- C. 10 tens

10. Mr. Ray has 10 cups. Then he buys 25 more cups. How many cups does Mr. Ray have now?

Mr. Ray has _____ cups.

12.
$$\begin{array}{r} 35 \\ + 3 \\ \hline \end{array}$$

14. Autumn picks 13 flowers. Kayla picks 3 more flowers than Autumn. How many flowers does Kayla pick?

Kayla picks _____ flowers.

16. $74 + 3 = ?$

18. Which TWO have a sum of 40?

- A. $30 + 10$
- B. $2 \text{ tens} + 2 \text{ tens}$
- C. $10 + 20$

Name _____

Find the correct answer.

1. Which number is 10 less than 17?

- A. 6
- B. 7
- C. 16
- D. 27

2. Which addition equation can you use to subtract $90 - 70$?

- A. $20 + 70 = 90$
- B. $30 + 60 = 90$
- C. $40 + 50 = 90$
- D. $50 + 40 = 90$

3. Subtract.

$$\begin{array}{r} 6 \text{ tens} \\ - 3 \text{ tens} \\ \hline \end{array}$$

- A. 1 ten
- B. 2 tens
- C. 3 tens
- D. 9 tens

4. Subtract.

$$\begin{array}{r} 80 \\ - 40 \\ \hline \end{array}$$

- A. 20
- B. 40
- C. 60
- D. 80

5. Subtract.

$$71 - 40 =$$

- A. 21
- B. 31
- C. 41
- D. 51


6. What number is 10 less than 62?

- A. 22
- B. 32
- C. 42
- D. 52

Name _____


Find the correct answer.

1. What time is shown?



- A. 6:00
- B. 6:30
- C. 12:00
- D. 12:30

2. What time is shown?



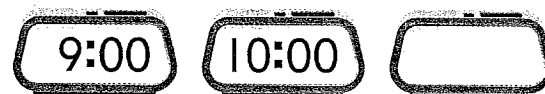
- A. 4:00
- B. 4:30
- C. 6:00
- D. 6:30

3. What are TWO other ways to write the time?



- A. half past 8
- B. half past 9
- C. 8 thirty
- D. 8 o'clock

4. What is the next time in the pattern?



- A. 10:30
- B. 11:00
- C. 11:30
- D. 12:00

5. Write the time shown on the clock.



_____ o'clock

Name _____

Find the correct answer.

1. Count on to find the total value.



- A. 1¢
- B. 4¢
- C. 8¢

2. Find the total value.



$$5¢ + 5¢ + 5¢ + 5¢$$

- A. 10¢
- B. 20¢
- C. 25¢

3. Find the total value.



$$10¢ + 1¢ + 1¢ + 1¢ + 1¢$$

- A. 14¢
- B. 21¢
- C. 41¢

4. Count on to find the total value.



- A. 4¢
- B. 12¢
- C. 16¢

5. Count by 10s to find the total value.



- A. 15¢
- B. 30¢
- C. 40¢

6. Find the total value.



$$10¢ + 5¢ + 5¢$$

- A. 20¢
- B. 30¢
- C. 40¢